



Teaches "Real-Life" Addition Skills

by
Janie Haugen



PCI educational publishing

This product is available through PCI Educational Publishing at 1-800-594-4263

TABLE OF CONTENTS

Introduction	4
Getting Started	5
Instructions for Completing “Biggie Burger” Worksheets	7
Instructions for Completing “Chicken Basket” Worksheets	8
“Biggie Burger” Worksheets – Answer Key/Progress Chart	9–12
“Chicken Basket” Worksheets – Answer Key/Progress Chart	13–16

WORKSHEETS

“Biggie Burger” Worksheets: Problems 1–66	1–48
“Chicken Basket” Worksheets: Problems 67–114	49–96

INSTRUCTIONS FOR COMPLETING "BIGGIE BURGER" WORKSHEETS

- A** Using the "Biggie Burger" menu order board, find the price of each food item on the worksheet.
- B** Write the price of each food item on the worksheet on the blank line to the right of its picture.
- C** Do the math and write the answer by the \$ sign at the bottom of the problem.

BIGGIE BURGER			
BURGERS		SIDE ORDERS	
Hamburger \$1.99	Cheeseburger \$2.19	Curly Fries <input type="checkbox"/> small \$.89 <input type="checkbox"/> large \$.99	Chestnut Rings <input type="checkbox"/> small \$1.29 <input type="checkbox"/> large \$1.49
Hamburger Combo \$3.19	Cheeseburger Combo \$3.39	Onion-Ring Fries <input type="checkbox"/> small \$1.29 <input type="checkbox"/> large \$1.49	Hot Fries <input type="checkbox"/> small \$.89 <input type="checkbox"/> large \$1.19
Double Meat Burger \$2.99	Double Meat Cheeseburger \$3.59	DOGS	
Double Meat Burger Combo \$4.29	Double Meat Cheeseburger Combo \$4.79	Hot Dog <input type="checkbox"/> regular \$1.09 <input type="checkbox"/> extra spicy \$2.04	Chili Cheese Hot Dog <input type="checkbox"/> regular \$1.89 <input type="checkbox"/> extra spicy \$2.39
Beef Cheeseburger \$2.49	Beef Cheeseburger Combo \$3.69	Spicy Sausage Dog <input type="checkbox"/> regular \$1.24 <input type="checkbox"/> extra spicy \$2.29	Chestnut Ring <input type="checkbox"/> regular \$.99 <input type="checkbox"/> extra spicy \$1.49
Turkey Burger \$2.69	Turkey Burger Combo \$3.64	DRINKS	
Veggie Burger \$2.29	Veggie Burger Combo \$3.49	Soft Drinks (regular or diet) <input type="checkbox"/> small \$.89 <input type="checkbox"/> medium \$.99 <input type="checkbox"/> large \$1.09	Lemonade (regular or pink) <input type="checkbox"/> small \$1.49 <input type="checkbox"/> medium \$1.69 <input type="checkbox"/> large \$1.79
SANDWICHES		Hot Dog (no onions) <input type="checkbox"/> small \$.79 <input type="checkbox"/> medium \$.89 <input type="checkbox"/> large \$.99	Milk Shakes (2 flavors) <input type="checkbox"/> small \$1.39 <input type="checkbox"/> medium \$1.49 <input type="checkbox"/> large \$1.59
Grilled Cheese Sandwich \$2.79	Sub Sandwich \$2.29	DESSERTS	
Pik Sandwich \$2.05	Grilled Cheese Sandwich \$.91	Ice Cream Cone <input type="checkbox"/> small \$.69 <input type="checkbox"/> large (vanilla, chocolate, or fruit) \$.89	Ice Cream Sundae (3 flavors, small size, 4 flavors, or hot fudge) \$1.50
		Ice Cream in a Dish <input type="checkbox"/> small \$.56 <input type="checkbox"/> large \$1.00 <small>(vanilla, chocolate, or fruit)</small>	Banana Split (vanilla or without nuts) \$2.15
		KIDS MEALS	
		Kid's Burger with fries \$2.30	Grilled Cheese Sandwich with fries \$1.10
		Kid's Hot Dog with later fries \$1.95	Kid's Coney Dog with later fries \$2.00
		Chicken Strips with Fries \$2.90	Fish Sticks with later fries \$2.20

Name _____ Date _____

A. Fill in the price of each food item. **B.** Add the food prices together to find the basic cost of the meal.

Biggie Burger	
<p>Grilled Cheese Sandwich </p>	<p>\$ <u>.95</u> B</p>
<p>Curly Fries <input checked="" type="checkbox"/> small <input type="checkbox"/> large </p>	<p><u>.69</u> B</p>
<p>Lemonade <input type="checkbox"/> small <input checked="" type="checkbox"/> pink <input checked="" type="checkbox"/> medium <input type="checkbox"/> pink <input type="checkbox"/> large </p>	<p><u>1.09</u> B</p>
<p>Ice Cream in a Dish <input type="checkbox"/> small <input type="checkbox"/> vanilla <input checked="" type="checkbox"/> large <input type="checkbox"/> chocolate <input checked="" type="checkbox"/> fruit </p>	<p>+ <u>1.00</u> B</p>
TOTAL	<p>\$ <u>3.73</u> C</p>

INSTRUCTIONS FOR COMPLETING "CHICKEN BASKET" WORKSHEETS

- A** Using the "Chicken Basket" menu order board, find the price of each food item on the worksheet.
- B** Write the price of each food item on the worksheet on the blank line to the right of its picture.
- C** Do the math and write the answer by the \$ sign at the bottom of the problem.

Chicken Basket					
CHICKEN		SANDWICHES		SIDE ORDERS	
2 Piece Thigh & Leg Dinner (Chicken only) \$3.79	2 Piece Breast & Wing Dinner (Chicken only) \$3.99	Original Chicken Sandwich \$3.99	Chicken Strip Sandwich \$3.99	French Fry (1/2 lb) \$1.99	Tenderloin (1/2 lb) \$1.99
3 Piece Thigh & Leg Dinner (Chicken only) \$4.79	3 Piece Breast & Wing Dinner (Chicken only) \$4.99	1/2 lb Fry \$1.99	Spicy Chicken Sandwich \$3.99	Hot Wings (1/2 lb) \$1.99	Boneless Skinless Chicken Breast (1/2 lb) \$1.99
4 Piece Thigh & Leg Dinner (Chicken only) \$5.79	4 Piece Breast & Wing Dinner (Chicken only) \$5.99	FAMILY SIZE ORDERS		Onion Rings (1/2 lb) \$1.99	Macaroni & Cheese (1/2 lb) \$1.99
4 Piece Thigh & Leg Dinner (Chicken only) \$4.59	4 Piece Breast & Wing Dinner (Chicken only) \$4.99	8 Piece Family Chicken Dinner (Chicken only) \$12.99	12 Piece Family Chicken Dinner (Chicken only) \$17.99	Crispy Chicken (1/2 lb) \$1.99	Newman's Own Pasta (1/2 lb) \$1.99
2 Piece Thigh & Leg Dinner (Chicken only) \$3.99	2 Piece Breast & Wing Dinner (Chicken only) \$4.19	12 Piece Family Chicken Dinner (Chicken only) \$12.99	20 Piece Family Chicken Dinner (Chicken only) \$17.99	Crispy Chicken (1/2 lb) \$1.99	Newman's Own Pasta (1/2 lb) \$1.99
4 Piece Thigh & Leg Dinner (Chicken only) \$4.59	4 Piece Breast & Wing Dinner (Chicken only) \$4.99	12 Piece Family Chicken Dinner (Chicken only) \$12.99	20 Piece Family Chicken Dinner (Chicken only) \$17.99	Crispy Chicken (1/2 lb) \$1.99	Newman's Own Pasta (1/2 lb) \$1.99
KIDS MEALS		DRINKS		DESSERTS	
Chicken Strip Dinner (Chicken only) \$3.99	Chicken Wings (1/2 lb) \$1.99	Soft Drink small \$0.89 medium \$1.19 large \$1.49	Hot Beverage small \$1.19 medium \$1.49 large \$1.79	Ice Cream small \$1.19 medium \$1.49 large \$1.79	Pie small \$1.19 medium \$1.49 large \$1.79
Chicken Strip Dinner (Chicken only) \$3.99	Chicken Wings (1/2 lb) \$1.99	Soft Drink small \$0.89 medium \$1.19 large \$1.49	Hot Beverage small \$1.19 medium \$1.49 large \$1.79	Ice Cream small \$1.19 medium \$1.49 large \$1.79	Pie small \$1.19 medium \$1.49 large \$1.79

Name _____ Date _____

A. Fill in the price of each food item. **B.** Add the food prices together to find the basic cost of the meal.

Chicken Basket	
<input type="checkbox"/> 4-Piece Thighs & Legs Dinner	
<input checked="" type="checkbox"/> 4-Piece Thighs & Legs (Chicken only)	\$ <u>4.59</u> B
Soft Drink	
<input checked="" type="checkbox"/> small	
<input type="checkbox"/> medium	
<input type="checkbox"/> large	<u>.89</u> B
French Fries	
<input checked="" type="checkbox"/> single	
<input type="checkbox"/> large	<u>1.00</u> B
Pudding	
<input type="checkbox"/> lemon	
<input checked="" type="checkbox"/> chocolate	<u>+.90</u> B
TOTAL	\$ <u>7.38</u> C

"BIGGIE BURGER" WORKSHEETS ANSWER KEY/PROGRESS CHART

Name _____


Worksheet Number	Problem Number	Problem and Answer	Criteria Met (✓)	Date
1	1	$.95 + .69 + 1.09 + 1.00 = 3.73$		
2	2	$1.19 + 2.99 + .79 + .69 = 5.66$		
3	3	$2.69 + .79 + 1.09 + .79 = 5.36$		
4	4	$2.79 + 1.69 + 1.39 + .80 = 6.67$		
5	5	$1.99 + .89 + .89 + 1.50 = 5.27$		
6	6	$.99 + 1.29 + 1.19 + 2.15 = 5.62$		
7	7	$2.19 + 1.09 + .99 + .99 = 5.26$		
8	8	$2.05 + .99 + 1.49 + .50 = 5.03$		
9	9	$2.00 + 1.69 + .99 + .89 = 5.57$		
10	10	$2.49 + .69 + .99 + .79 = 4.96$		
11	11	$2.39 + .79 + .89 + .80 = 4.87$		
12	12	$1.79 + 1.19 + .89 + 1.50 = 5.37$		

**"BIGGIE BURGER" WORKSHEETS
ANSWER KEY/PROGRESS CHART**

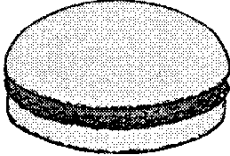
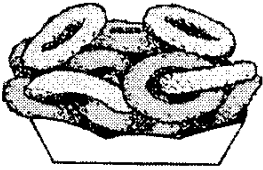


Name _____

Worksheet Number	Problem Number	Problem and Answer	Criteria Met (✓)	Date
13	13	$3.59 + 1.59 + .50 + 1.69 = 7.37$		
14	14	$1.09 + .99 + \text{—} + .99 = 3.07$		
15	15	$1.89 + .79 + .99 + 2.15 = 5.82$		
16	16	$2.29 + 1.29 + .79 + .69 = 5.06$		
17	17	$.95 + 1.09 + 1.49 + .50 = 4.03$		
18	18	$3.09 + .89 + \text{—} + 1.50 = 5.48$		
19	19	$1.49 + .69 + 1.09 + 2.15 = 5.42$		
20	20	$.89 + 1.29 + .89 + 1.00 = 4.07$		
21	21	$2.79 + .89 + 1.19 + .79 = 5.66$		
22	22	$2.05 + 1.09 + .89 + .80 = 4.83$		
23	23	$2.70 + 1.69 + \text{—} + .50 = 4.89$		
24	24	$2.39 + .99 + 1.59 + .89 = 5.86$		


Name _____ Date _____





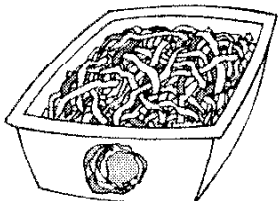
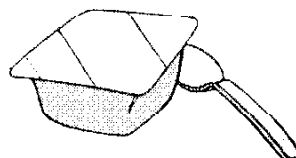
A. Fill in the price of each food item. **B.** Add the food prices together to find the basic cost of the meal.

20 <i>Biggie Burger</i>		
<input checked="" type="checkbox"/> Jr. Hamburger <input type="checkbox"/> Jr. Hamburger Combo		\$ _____ _____
Onion Rings <input checked="" type="checkbox"/> small <input type="checkbox"/> large		_____ _____
Iced Tea (unsweetened) <input type="checkbox"/> small <input checked="" type="checkbox"/> medium <input type="checkbox"/> large		_____ _____
Ice Cream in a Dish <input type="checkbox"/> small <input type="radio"/> vanilla <input checked="" type="checkbox"/> large <input type="radio"/> chocolate <input type="radio"/> twist		+ _____ _____
TOTAL		\$ _____ _____


Name _____ Date _____



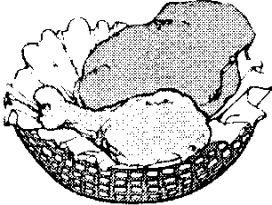




























A. Fill in the price of each food item. **B.** Add the food prices together to find the basic cost of the meal.

78 <i>Chicken Basket</i>		
<p><input type="checkbox"/> 2-Piece Breast & Wing Dinner</p> <p><input checked="" type="checkbox"/> 2-Piece Breast & Wing (Chicken only)</p>		<p>\$ _____</p>
<p>Soft Drink</p> <p><input type="checkbox"/> small</p> <p><input type="checkbox"/> medium</p> <p><input checked="" type="checkbox"/> large</p>		<p>_____</p>
<p>Cole Slaw</p> <p><input checked="" type="checkbox"/> single</p> <p><input type="checkbox"/> large</p>		<p>_____</p>
<p>Pudding</p> <p><input type="radio"/> lemon</p> <p><input type="radio"/> chocolate</p>		<p>+</p> <p>_____</p>
<p>TOTAL</p>		<p>\$ _____</p>

Name _____ Date _____



A. Fill in the price of each food item. B. Add the food prices together to find the basic cost of the meal.

102 Chicken Basket											
<p><input checked="" type="checkbox"/> 2-Piece Thigh & Leg Dinner</p> <p><input type="checkbox"/> 2-Piece Thigh & Leg (Chicken only)</p> <div style="text-align: center; margin: 10px 0;">  </div> <p style="text-align: center; font-weight: bold; margin: 10px 0;">Choose 2 single side orders</p> <table style="width: 100%; border: none;"> <tr> <td style="width: 50%; vertical-align: top;"> <p>Potatoes & Gravy</p> <p><input type="checkbox"/> single </p> <p><input type="checkbox"/> large</p> </td> <td style="width: 50%; vertical-align: top;"> <p>Corn on-the-cob</p> <p><input type="checkbox"/> single </p> <p><input type="checkbox"/> large</p> </td> </tr> <tr> <td style="vertical-align: top;"> <p>French Fries</p> <p><input type="checkbox"/> single </p> <p><input type="checkbox"/> large</p> </td> <td style="vertical-align: top;"> <p>BBQ Baked Beans</p> <p><input type="checkbox"/> single </p> <p><input type="checkbox"/> large</p> </td> </tr> <tr> <td style="vertical-align: top;"> <p>Cole Slaw</p> <p><input type="checkbox"/> single </p> <p><input type="checkbox"/> large</p> </td> <td style="vertical-align: top;"> <p><input type="checkbox"/> Biscuits (6) </p> <p><input type="checkbox"/> Biscuits (12)</p> </td> </tr> <tr> <td style="vertical-align: top;"> <p>Fried Okra</p> <p><input type="checkbox"/> single </p> <p><input type="checkbox"/> large</p> </td> <td style="vertical-align: top;"> <p>Gravy</p> <p><input type="checkbox"/> single </p> <p><input type="checkbox"/> large</p> </td> </tr> <tr> <td style="vertical-align: top;"> <p>Macaroni & Cheese</p> <p><input type="checkbox"/> single </p> <p><input type="checkbox"/> large</p> </td> <td style="vertical-align: top;"> <p>Potato Wedges</p> <p><input type="checkbox"/> single </p> <p><input type="checkbox"/> large</p> </td> </tr> </table>	<p>Potatoes & Gravy</p> <p><input type="checkbox"/> single </p> <p><input type="checkbox"/> large</p>	<p>Corn on-the-cob</p> <p><input type="checkbox"/> single </p> <p><input type="checkbox"/> large</p>	<p>French Fries</p> <p><input type="checkbox"/> single </p> <p><input type="checkbox"/> large</p>	<p>BBQ Baked Beans</p> <p><input type="checkbox"/> single </p> <p><input type="checkbox"/> large</p>	<p>Cole Slaw</p> <p><input type="checkbox"/> single </p> <p><input type="checkbox"/> large</p>	<p><input type="checkbox"/> Biscuits (6) </p> <p><input type="checkbox"/> Biscuits (12)</p>	<p>Fried Okra</p> <p><input type="checkbox"/> single </p> <p><input type="checkbox"/> large</p>	<p>Gravy</p> <p><input type="checkbox"/> single </p> <p><input type="checkbox"/> large</p>	<p>Macaroni & Cheese</p> <p><input type="checkbox"/> single </p> <p><input type="checkbox"/> large</p>	<p>Potato Wedges</p> <p><input type="checkbox"/> single </p> <p><input type="checkbox"/> large</p>	<p style="font-size: 2em;">\$</p> <hr style="border: 1px solid black;"/>
<p>Potatoes & Gravy</p> <p><input type="checkbox"/> single </p> <p><input type="checkbox"/> large</p>	<p>Corn on-the-cob</p> <p><input type="checkbox"/> single </p> <p><input type="checkbox"/> large</p>										
<p>French Fries</p> <p><input type="checkbox"/> single </p> <p><input type="checkbox"/> large</p>	<p>BBQ Baked Beans</p> <p><input type="checkbox"/> single </p> <p><input type="checkbox"/> large</p>										
<p>Cole Slaw</p> <p><input type="checkbox"/> single </p> <p><input type="checkbox"/> large</p>	<p><input type="checkbox"/> Biscuits (6) </p> <p><input type="checkbox"/> Biscuits (12)</p>										
<p>Fried Okra</p> <p><input type="checkbox"/> single </p> <p><input type="checkbox"/> large</p>	<p>Gravy</p> <p><input type="checkbox"/> single </p> <p><input type="checkbox"/> large</p>										
<p>Macaroni & Cheese</p> <p><input type="checkbox"/> single </p> <p><input type="checkbox"/> large</p>	<p>Potato Wedges</p> <p><input type="checkbox"/> single </p> <p><input type="checkbox"/> large</p>										
<p>Pink Lemonade</p> <p><input type="checkbox"/> small</p> <p><input checked="" type="checkbox"/> medium</p> <p><input type="checkbox"/> large</p> <div style="text-align: center; margin: 10px 0;">  </div>	<p style="font-size: 2em;">+</p> <hr style="border: 1px solid black;"/>										
TOTAL	<p style="font-size: 2em;">\$</p> <hr style="border: 1px solid black;"/>										